

MATH 052: INTRODUCTION TO PROOFS
HOMEWORK #20

Problem 2.9.11(a). Draw a directed graph for each relation in Example 2.53(c) and Example 2.56(b).

Solution. The directed graphs are shown on the next page.

Problem 2.9.11(b)(c)(d). For each of the following, describe a property of $G(R)$ associated with the condition on R .

- (b) R is symmetric.
- (c) R is reflexive.
- (d) R is transitive.

Solution. For (b), R is symmetric if and only if any time there is an edge from one vertex to another, there should be the opposite edge in the other direction.

For (c), R is reflexive if and only if there is a “self-loop” from a vertex to itself for all vertices.

For (d), R is transitive if and only if there is an edge from vertices v to w and an edge from w to x then there is an edge directly from v to x . For example, in Example 2.53(c), R_1 is not transitive but R_2 is.

Problem 2.9.17. Let \sim be an equivalence relation on the set $\{1, 2, 3\}$

- (a) Suppose \sim has exactly three ordered pairs. List them explicitly.
- (b) Is it possible that \sim has exactly *four* ordered pairs? Explain.
- (c) What is the maximum possible number of ordered pairs in \sim ? When \sim is chosen with this maximum number of ordered pairs, what is the corresponding partition into equivalence classes?

Solution. For (a), since an equivalence relation is reflexive, it must contain the subset $\{(1, 1), (2, 2), (3, 3)\}$; if \sim only has three elements, then this must be equality.

For (b), no \sim cannot have four ordered pairs. It must have the three above. If it contains a new ordered pair (a, b) for $a, b \in \{1, 2, 3\}$, then by symmetry it must also contain (b, a) , and since these are distinct \sim would have to have at least 5 elements.

Finally, for (c) we can just take \sim to consist of the entire Cartesian product $\{1, 2, 3\} \times \{1, 2, 3\}$, namely, all elements are related to all others. This is an equivalence relation (obviously reflexive, symmetric, and transitive, because it contains all pairs!); the partition of the set consists of a single block containing the entire set.

Problem 2.9.20. For each of the following, determine whether the given relation is or is not an equivalence relation. Then, if it *is* an equivalence relation, describe the partition it induces.

- (a) On the set H of human beings, define $x \sim y \Leftrightarrow x$ and y weigh within one pound of each other.
- (b) On the set C of all solid-color cars, define $x \sim y \Leftrightarrow x$ and y have the same color.
- (c) On the set \mathbb{N} of positive integers, consider the *divisibility* relation defined in Exercise 15(b).
- (d) On the set \mathbb{R} of real numbers, define $x \sim y \Leftrightarrow x^2 = y^2$.
- (e) On the set \mathbb{R} of real numbers, define $x \sim y \Leftrightarrow xy < 0$.
- (f) On the plane $\mathbb{R} \times \mathbb{R}$, define $P \sim Q$ to mean that P and Q have the same y -coordinate.

Solution. For (a), no it is not equivalence relation, it is not transitive. If person x weighs 135 pounds, person y weighs 136 pounds, and person z weighs 137 pounds, then $x \sim y$ and $y \sim z$ but $x \not\sim z$.

For (b), yes, it is an equivalence relation: the equivalence classes consist of cars all having the same color.

For (c), no, it is not symmetric: we have $2 \mid 4$ but $4 \nmid 2$.

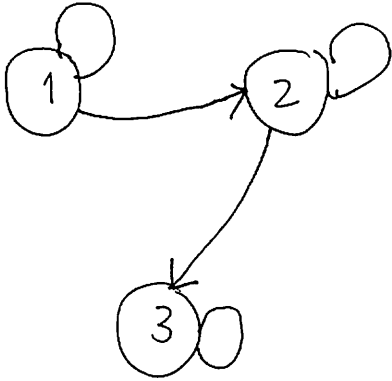
For (d), yes, it is an equivalence relation: the equivalence classes consist of the sets $[0] = \{0\}$ and $[x] = \{x, -x\}$ for $x \neq 0$.

For (e), no, it is not, it is not transitive: if $x = 1$, $y = -1$, and $z = 1$, then $xy = -1 < 0$ and $yz = -1 < 0$ so $x \sim y$ and $y \sim z$, but $xz = 1 > 0$ so $x \not\sim z$.

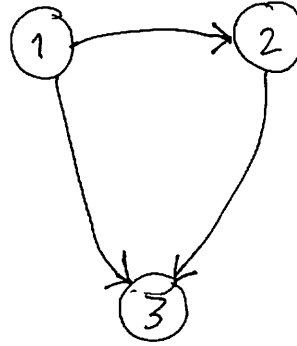
Finally, for (f), it is an equivalence relation: the equivalence classes consist of horizontal lines, $[(x, y)] = \{(a, y) : a \in \mathbb{R}\}$.

2.53(c)


R_1



R_2




R_3



2.56(b)

R



R_1

